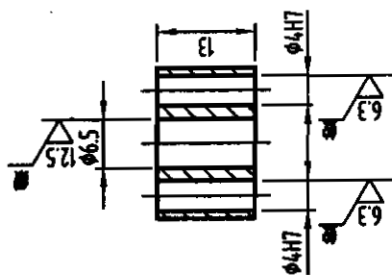
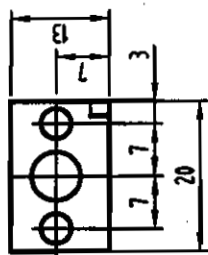
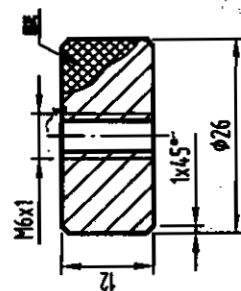


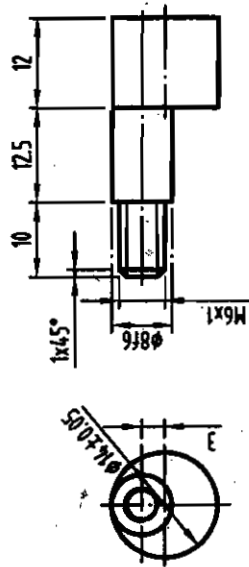
5 $\sqrt[6.3]{12.5}$ ($\sqrt[6.3]{12.5}$)



6



4 $\sqrt[6.3]{12.5}$



2 $\sqrt[6.3]{12.5}$ ($\sqrt[6.3]{12.5}$)

